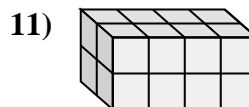
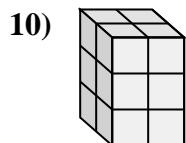
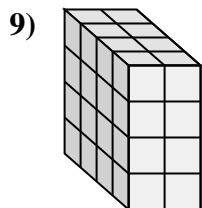
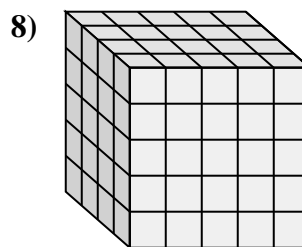
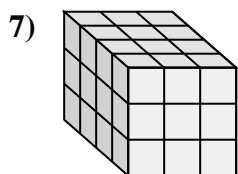
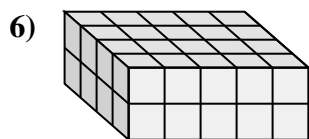
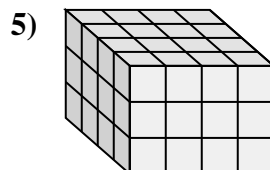
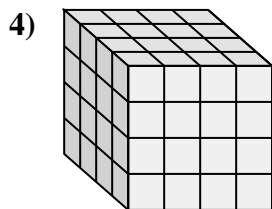
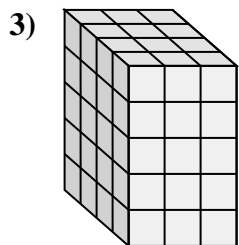
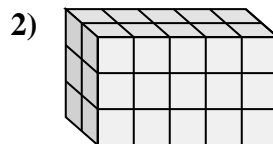
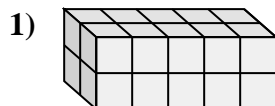
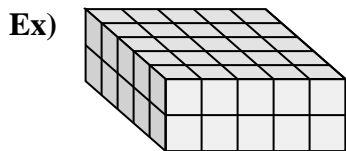




Match each problem with the equation that could represent it. Answer with the missing term and letter.



Answers

Ex. A, 5

1. _____

2. _____

3. _____

4. _____

5. _____

6. _____

7. _____

8. _____

9. _____

10. _____

11. _____

A. $___ \times 5 \times 2 = 50$

B. $4 \times 2 \times 4 = ___$

C. $4 \times ___ \times 2 = 40$

D. $2 \times 2 \times 3 = ___$

E. $___ \times 5 \times 5 = 100$

F. $4 \times ___ \times 5 = 60$

G. $4 \times ___ \times 3 = 48$

H. $4 \times ___ \times 3 = 36$

I. $2 \times 5 \times 2 = ___$

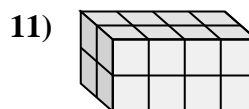
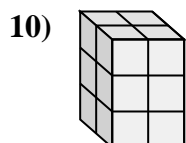
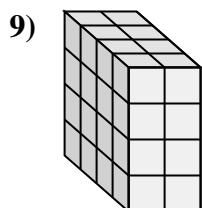
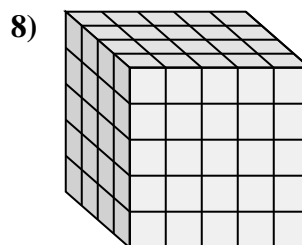
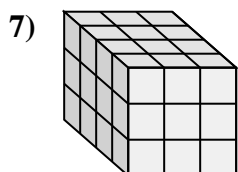
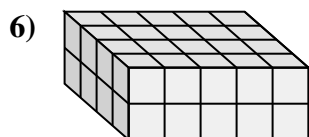
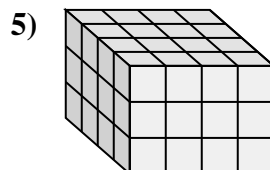
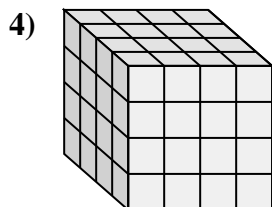
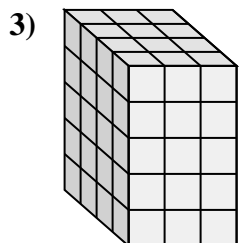
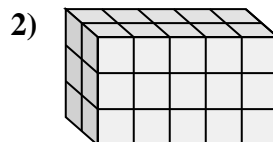
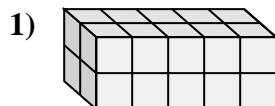
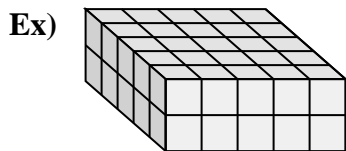
J. $___ \times 4 \times 2 = 16$

K. $2 \times 5 \times 3 = ___$

L. $4 \times ___ \times 4 = 64$



Match each problem with the equation that could represent it. Answer with the missing term and letter.



Answers

Ex. A, 5

1. I, 20

2. K, 30

3. F, 3

4. L, 4

5. G, 4

6. C, 5

7. H, 3

8. E, 4

9. B, 32

10. D, 12

11. J, 2

A. $__ \times 5 \times 2 = 50$

B. $4 \times 2 \times 4 = __$

C. $4 \times __ \times 2 = 40$

D. $2 \times 2 \times 3 = __$

E. $__ \times 5 \times 5 = 100$

F. $4 \times __ \times 5 = 60$

G. $4 \times __ \times 3 = 48$

H. $4 \times __ \times 3 = 36$

I. $2 \times 5 \times 2 = __$

J. $__ \times 4 \times 2 = 16$

K. $2 \times 5 \times 3 = __$

L. $4 \times __ \times 4 = 64$